

Social and Religious Studies

Date: 25th June 2024

Period: 9:30-10:30 AM



**END OF TERM III EXAMINATION
QUESTION PAPER**

GRADE: PRIMARY ONE (P1)

LEVEL: PRIMARY

DURATION: 1 HOUR

MARKS:

...../40

CAMIS:

...../40

INSTRUCTIONS

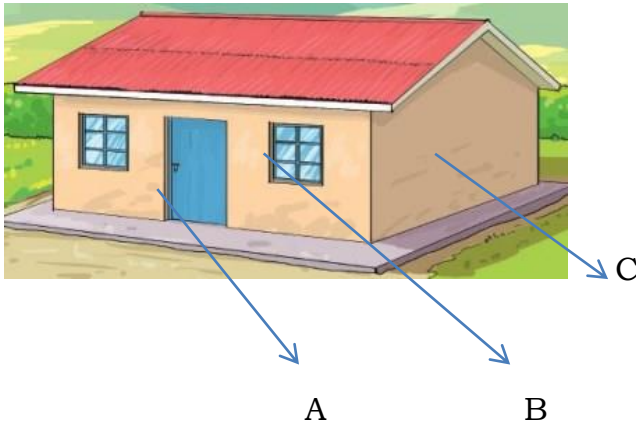
- 1) Write your names and level on the answer booklet.
- 2) Do not open this question paper until you are told to do so.
- 3) This paper has only **one** section **A**.
- 4) Use a **blue** or **black** pen

SECTION A: Attempt all questions. (40 marks)

SECTION A: ANSWER ALL QUESTIONS

1) a) A place where people live is called..... **(Home, forest, school).**
(1 mark)

b) Name the parts of the house below by choosing the correct answers from the bracket **.(window, wall, and door)** **(3 marks)**



A.....
 B.....
 C.....

2) Fill in the numerical numbers showing the flags of different countries.

			
Kenya 1.	Rwanda 2.	Uganda 3.	USA 4.

a) Rwanda national flag is number**(1mark)**
 b) Name the three colors of the Rwanda national flag **(3 marks)**

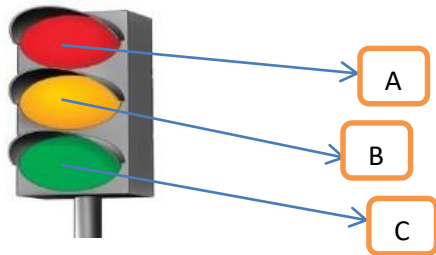
3) Answer by using **Yes or No.** **(4 marks)**

- a) Brushing our teeth every day is good
- b) Caring for our body hygiene makes us feel health
- c) Cleaning our houses every day is very bad.....
- d) Washing our hands after visiting toilets is good.....

4) Answer by using by (YES or NO). (1 mark)

a) Is it good for children to play on the road side?

b) Name the colors showing the Road Traffic lights below by choosing the answers from the bracket. **(Red, green and yellow). (3 marks)**



A:

B:

C:

5) Answer by using (Yes or No) (4 marks)

a) Human beings are different from other creatures because they are created in the image of God.....

b) Respecting the God's creature is a good behaviour

c) Praying every day is a bad behaviour.....

d) Helping people is a good behaviour.....

6) Choose any four creatures among the following that were created by God and live on the land all the time. (4 marks)

a) Cow

b) Dog

c) Goat

d) Fish

e) People

i.....

ii.....

iii.....

iv.....

7) Choose four sources of living in harmony with other children at school among the following: **(4 marks)**

- a) Greeting others.
- b) Abusing others
- c) Helping others
- d) Respecting others
- e) Obeying school rules

a)

b) c)

d)

8) Write down any four school items by choosing the answers from the given bracket. **(Eraser, Textbook, moon, pen, chalk).** **(4 marks)**

a)

b) c)

d)

9) Show whether the following features are human-made or not by using **True** or **False** **(4 marks)**

a) Classrooms b)

Roads..... c)

Mountains..... d)

Play grounds

10) Answer by using **Yes or No** about things we should do to have a peaceful family. **(4 marks)**

a) Respecting our parents.....

b) Stealing our parents' money..... c) Playing with other children well.....

d) Helping parents to do home activities.....

END

Social and Religious Studies

Date: 25th June 2024

Period: 9:30-10:30 AM



END OF TERM III EXAMINATION

MARKING GUIDE

GRADE: PRIMARY ONE (P1)

LEVEL: PRIMARY

DURATION: 1 HOUR

MARKS:

...../40

CAMIS:

...../40

INSTRUCTIONS

- 1) Write your names and level on the answer booklet.
- 2) Do not open this question paper until you are told to do so.
- 3) This paper has only **one** section **A**.
- 4) Use a **blue** or **black** pen

SECTION A: Attempt all questions. (40 marks)

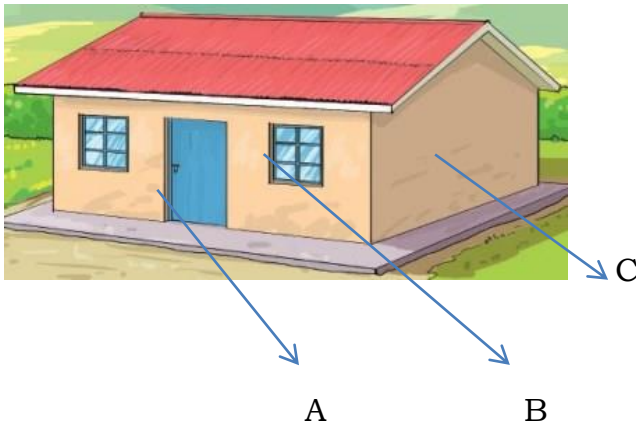
SECTION A: ANSWER ALL QUESTIONS

1 a) A place where people live is called..... (**Home, forest, school**).

(1 mark)

Answer: home

b) Name the parts of the house below by choosing the correct answers from the bracket .(**window, wall, and door**) **(3 marks)**



A.....

B.....


C.....

A. Door

B. Window

C. Wall (3marks)

2) Fill in the numerical numbers showing the flags of different countries.



Answer:

a) Rwanda national flag is number(2)..... **(1mark)**

b) Name the three colors of the Rwanda national flag **(3 marks)**
blue, Yellow and green

3) Answer by **Yes** or **No**. **(4 marks)**

- a) (Brushing our teeth every day is good
- b) Caring for our body hygiene makes us feel health
- c) Cleaning our houses every day is good.....
- d) Washing our hands after visiting toilets is good.....

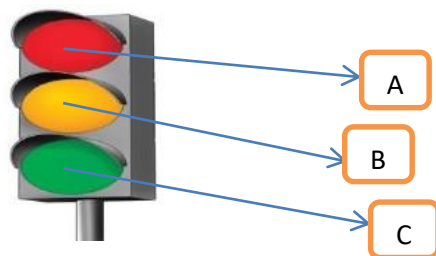
Answer:

- a) Brushing our teeth every day is good **Yes**
- b) Caring for body hygiene makes us feel health **Yes**
- c) Cleaning our houses every day is very bad **No**
- d) Washing our hands after visiting toilets is good **Yes**

4) Answer by using by **(Yes or No)** **(1 mark)**

a) Is it good for children to play on the road side?**NO**

b) Name the colors showing road traffic signs by choosing answers from the bracket below. **(Red, green and yellow)** **(3 marks)**



A:RED.....

B:
.....YELLOW.....

C:.....GREEN.....

5) Answer by using **Yes or No**. **(4 marks)**

- a) Human beings are different from other creatures because they are created in the image of God.....
- b) Respecting the God's creature is a good behaviour.....
- c) Praying every day is a good behaviour.....
- d) Helping people is a good behaviours.....

- a) Human beings are different from other creatures because they are created in the image of God.....**YES**.....
- b) Respecting the God's creature is a good behaviour **YES**.....
- c) Praying every day is a bad behaviour.....**NO**.....
- D)Helping people is a good behaviour.....**YES**.....

6) Choose any four creatures among the following that were created by God and live on the land all the time. **(4 marks)**

- a) Cow
- b) Dog
- c) Goat
- d) fish
- e) People

i.....**Cow**.....ii.....**Goat**.....

...

ii.....**Dog**.....iv.....**people**.....

7) Choose the sources of living in harmony with other children at school among the following:

- a) Greeting others.
- b) Abusing others
- c) Helping others
- d) Respecting others
- e) Obeying school rules

Answer:

- Greeting others.
- Helping others
- Respecting others
- Obeying school rules

8) Write down any four school items by choosing answers from the bracket below (**Eraser, Textbook, pen, chalk**). **(4 marks)**

answer:

- a) Eraser**
- b) Text book**
- c) Pen**
- d) Chalk**

9) Show whether the following features are human-made or not by using **True** or **False** **(4 marks)**

- a) ClassroomsTrue.....
- b) Roads.....True.....
- c) Mountains.....False.....
- d) Play groundsTrue.....

10) Answer by using **Yes or No** about things we should do to have a peaceful family. **(4 marks)**

- a) Respecting our parents.....True.....
- b) Stealing our parents' money.....False.....
- c) Playing with other children well.....True.....
- d) Helping parents to do home activities.....False.....

END