

**SOCIAL AND RELIGIOUS
STUDIES
PSRS**

8/7/2024 1.30 PM - 3.30 PM



Pupil's complete index number

Province/ City	District	Center	School	Level	Pupil	Year
<input type="text"/>	<input type="text"/>	<input type="text"/>	<input type="text"/>	<input type="text"/>	<input type="text"/>	<input type="text"/>

Pupil's names

Surname:

Other names:

NB: PUPIL'S INDEX NUMBER AND NAMES
MUST BE WRITTEN AS THEY APPEAR ON THE
REGISTRATION FORM

PRIMARY LEAVING NATIONAL EXAMINATIONS, 2023-2024

SOCIAL AND RELIGIOUS STUDIES

Duration: Two hours

Marks:

/100

Instructions to candidates:

- 1) Do not open this paper until you are told to do so.
- 2) Read each question carefully before answering it.
- 3) All questions are compulsory and must be answered as instructed.
- 4) Answer all the questions in this question paper.
- 5) You must use a **blue** or **black** pen.

Attempt all questions.

1) Identify any two districts which are found in the Eastern province of Rwanda.

- a) Nyagatare District
- b) Gatsibo District
- c) Nyanza District

i)..... (1 mark)

ii).....(1 mark)

2) Mention any two economic activities which enable people in your province to earn money.

i)(1 mark)

ii).....(1 mark)

3) Use the words given in the brackets to complete the table below.

(Roads, Hospitals)

(2 marks)

Infrastructure	Their importance.
.....	They help people to get medicine, provide medical treatment and give care to the sick people or patients.
.....	They help people to move their goods and services from one place to another. They facilitate smooth movement of heavy loads and long vehicles to transport various commodities all over the country.

4) State any two causes of conflicts and disharmony in your community.

i)(1 mark)

ii)(1 mark)

5) Write down any two examples of human rights in your country.

i)(1 mark)

ii)(1 mark)

6) Outline two indicators of harmony in your province.

i)(1 mark)

ii)(1 mark)

7) Choose, among the alternatives given below, the two best ways of managing conflicts in your society.

a) Arbitration

b) Mediation

c) Sleeping under the tree

d) Burning rubbish

i)(1 mark)

ii)(1 mark)

8) Write in full the following abbreviations:

a) AIDS(1 mark)

b) STIs(1 mark)

9) Identify any two ways of preventing the spread of malaria in your country.

a)(1 mark)

b)(1 mark)

10) Explain any two ways of preventing HIV/AIDS in your country.

a)(1 mark)

b)(1 mark)

11) Choose, among the alternatives given below, any two examples of diseases that are spread by using or drinking dirty water.

a) Cholera

b) Typhoid

c) HIV/AIDS

d) Malaria fever

i)(1 mark)

ii)(1 mark)

12) State any two services provided by commercial banks in Rwanda.

a)(1 mark)

b)(1 mark)

13) Which bank is responsible for printing new notes and coins in Rwanda?

..... (2 marks)

14) Mention any two major sources of money that the government uses to support and provide social services in Rwanda.

a)(1 mark)

b)(1 mark)

15) Give any two reasons why the government collects taxes in your country.

a)(1 mark)

b)(1 mark)

16) A family earns 280,000 Frw per month and spends 250,000 Frw every month. Calculate the monthly savings for the family. (2 marks)

.....
.....

17) In which ways is budgeting important to the community and families in your country?

a)(1 mark)

b)(1 mark)

18) Give any two elements of Rwanda National coat of arm.

a)(1 mark)

b)(1 mark)

19) State any two indicators of good governance.

a)(1 mark)

b)(1 mark)

20) What are the qualities of a good leader?

a)(1 mark)

b)(1 mark)

21) Identify any two ways of promoting harmony in your country.

a)(1 mark)

b)(1 mark)

22) When is a national flag raised at half-mast?

.....(2 marks)

23) Choose, from the following titles, one title that is given to a person who heads a province in Rwanda.

- a) Mayor
- b) Executive Secretary of the province.
- c) Governor
- d) Chief justice

.....(2 marks)

24) In the table below, name districts where the following Genocide memorial sites are located..

(2 marks)

(Gasabo, Bugesera, Karongi, Kirehe)

Genocide memorial sites	District where it is located
a) Kigali genocide memorial Site
b) Ntarama genocide memorial Site

25) Give any two important public places found in Rwanda.

a)(1 mark)

b)(1 mark)

26) Match the following instruments of weather with their functions or uses. (2 marks)

Instruments of weather forecast	Uses or functions
a) Barometer	Measures air pressure
b) Hygrometer	Measures the amount of water vapour in the atmosphere.

27) The general counting of people in a certain country

is called(2 marks)

28) The following are some of the reasons why a government carries out population census in a country. State whether the statements are

True or False.

a) To know the number of people in the country.....(1 mark)

b) To plan for the people in the country.....(1 mark)

29) Match the national parks in A with their respective provinces where they are found in B. (2 marks)

A National Parks	B Respective Provinces
a) Akagera National Park	i) Northern province
b) Virunga or Volcanoes National Park	ii) Eastern Province

30) Mention any two human activities which may destroy our environment.

a)(1 mark)

b)(1 mark)

31) Use an arrow to match the source of energy in A with its energy type

generated in B

(2 marks)

A Source of energy	B Type of energy generated
a) Running water	Solar energy
b) Sun	Hydropower

32) Give reasons why markets are important in our selte teen reproduction

a)(1 mark)

b)(1 mark)

33) Match the different wild animals with their habitats.

(2 marks)

Wild Animals	Habitats
Zebra	Lakes/River
Crocodiles	Savana grasslands

34) Name one African country which was not colonised by European nations. Riberia and Ethiopia.

..... (2 marks)

35) State any two economic activities that were carried out in pre-colonial Rwanda.

a)(1 mark)

b)(1 mark)

36) State whether the following statements are True or False about the social activities that were practiced in pre-colonial Rwanda

a) Naming of children..... (1 mark)

b) Traditional Marriage..... (1 mark)

37) Suggest any two examples of taboos in pre-colonial Rwanda.

a)(1 mark)

b)(1 mark)

38) Identify any two positive effects of colonisation in Rwanda.

a)(1 mark)

b)(1 mark)

39) Match the Natural Resources in A with their importance in B. (2 marks)

A Natural resources	B Their importance
Forests	Provides fire woods, timbers, rainfall
Rivers	Provides fish and fresh water for home use

40) Write the following abbreviations in full: (2 marks)

a) IMF.....

b) WHO.....

41) Give any two importance of Angels according to Christian religion and Islamic faith.

a)(1 mark)

b)(1 mark)

42) Either,

Give any two gifts of the Holy Spirit.

i)(1 mark)

ii)(1 mark)

Or,

Give any two categories of people who are exempted from fasting during the Holy month of Ramadhan.

i)(1 mark)

ii)(1 mark)

43) Either,

List down any two examples of sacraments in Christianity.

i)(1 mark)

ii)(1 mark)

Or,

State any two special characteristics of The Night of Decree (laylat al Qadr)

i)(1 mark)

ii)(1 mark)

44) Either,

Use the following words to fill in the gaps below.

Gashora/Golgotha/Judas Iscariot/Thomas

i) Jesus Christ was betrayed by(1 mark)

ii) Jesus was crucified on the cross at a place called (1 mark)

Or,

i)The place where Muslims go for pilgrimage (Holy journey) is called
.....(1 mark)

ii) A Mosque is a place where Muslims always go to perform their
.....(1 mark)

45) Show whether the statements below are True or False about the importance of God's creatures.

a) They are sources of income..... (1 mark)

b) They are sources of medicine..... (1 mark)

46) Either,

The following are attributes of God according to the Christian beliefs. State whether they are True or False. (2 marks)

i) Omnipotent.....

ii) Omnipresent.....

Or,

Show whether the following statements are True or False. (2 marks)

i) Reading or reciting the Holy Qur'an daily is a good thing that a Muslim should do or perform

ii) A Muslim should show kindness to the poor and help the needy.....

47) Either,

Explain the two reasons why reading the Holy Bible is important to Christians. I guides people...

i)(1 mark)

ii)(1 mark)

Or,

Explain any two major sins Muslims must not commit or do according to Islamic faith.

i)(1 mark)

ii)(1 mark)

48) Either,

Show the difference between the Old Testament and the New Testament by using **True** or **False**. (2 marks)

i) The Old Testament records the preparation of Salvation.
.....

ii) The New Testament records the accomplishment of Salvation.
.....

Or,

State whether the meaning of the following terms as used in Islamic faith are

True or False. (2 marks)

i) Zakat is the alms given to the poor in form of money or cereal crops and animals, it is paid once year.....

ii) Sadaqah is an act of giving money in the way of Allah in order to develop the Muslim community and helping the needy people.....

49) Either,

Choose, from the alternatives given below, any two ways through which Christians communicate to God.

a) Through praying, worshiping and praising.

b) Through preaching and reading the Bible.

c) Through fighting people

i)(1 mark)

ii)(1 mark)

Or,

Choose, among the following, any two reasons why Muslims go to perform prayers.

a) To ask for forgiveness from God (Allah) and show obedience to Him

b) To abuse people and do bad things

c) To ask for God's protection and communicate to Him.

i)(1 mark)

ii)(1 mark)

50) Choose, from the following examples, any two kind deeds that believers can show to their communities and neighbours.

a) Showing love and care for people.

b) Slapping people constantly.

c) Showing kindness and helping people.

d) Abusing people every day.

i)(1 mark)

ii)(1 mark)

-END-



Marking guides

Attempt all questions.

- 1) i) Nyagatare districk
ii) **Gatsibo district.**
- 2) i) **Farming**
ii) **Trade**
- 3) **-Hospitals**
- Roads
- 4) i) **drugs**
ii) **fighting**
- 5) i) **Right to education**
ii) **Right to health care**
- 6) i) **unity**
ii) **helping others.**
- 7) i) **Arbitration**
ii) **Mediation**
- 8) a) **AIDS:** Acquired Immune Deficiency Syndrome
b) **STIs:** Sexually Transmitted Infections
- 9) a) **Sleeping under mosquito-nets.**
b) **Cutting bushes around the houses.**
- 10) a) **Avoid sexual intercourse no-protected**
b) **Abstinence**
- 11) i) **Cholera**
ii) **Typhoid**
- 12) a) **giving loan.**
b) **giving interest.**
- 13) **RNB (Ruanda National bank)**

- 14) a) **Taxes**
 b) **Trade (Export)**
- 15) a) **To build public assets.**
 b) **To import products**
- 16) **savings = 280000F-250000F = 30000frw**
- 17) a) **prepare for the future**
 b) **manage well the family properties**
- 18) a) **two shields**
 b) **sorghum**
- 19) a) **Development**
 b) **peace (unity)**
- 20) a) **A good leader must be smart.**
 b) **A good leader must be honest.**
- 21) a) **Reconciliation.**
 b) **unity.**
- 22) **In mourning when a president die.**
- 23) **Governer.**
- 24) i) **Gasabo**
 ii) **Brugesera**
- 25) a) provide a monery.
 b) Give a Jobs.

26) Match the following instruments of weather with their functions or uses.

Instruments of weather forecast	Uses or functions
a) Barometer 	Measures air pressure
b) Hygrometer 	Measures the amount of water vapour in the atmosphere.

27) **population census.**

28) a) To know the number of people in the country **true**

b) To plan for the people in the country **true**

29) Match the national parks in A with their respective provinces where they are found in B.

A National Parks	B Respective Provinces
a) Akagera National Park	i) Northern province
b) Virunga or Volcanoes National Park	ii) Eastern Province

30) a) **Agriculture**

b) **Burning bushes**

31) Use an arrow to match the source of energy in A with its energy type generated in B

A Source of energy	B Type of energy generated
a) Running water	Solar energy
b) Sun	Hydropower

32) a) **It is where people buy and sell their reproduction**

b) **Give taxes**

33) Match the different wild animals with their habitats.

Wild Animals	Habitats
Zebra	Lakes/River
Crocodiles	Savana grasslands

34) **Liberia and Ethiopia**

35) a) **hunting**

b) **craft**

36) a) **True**

b) **True**



37) a) whistling at night

b) sitting on mortar

38) a) **Introduction of modern education**

b) **Infrastructure development**

39) Match the Natural Resources in A with their importance in B.

A Natural resources	B Their importance
Forests 	Provides fire woods, timbers, rainfall
Rivers 	Provides fish and fresh water for home use

40) a) **IMF**: International Monetary Fund.

b) **WHO**: World Health Organisation.

41) a) **to protect us**

b) **Lead us on the path to heaven**

42) **Either,**

i) **Fear of the Lord**

ii) **piety**

Or,

i) **pregnant women**

ii) **pre-pubertal children.**

43) **Either,**

i) **Baptism**

ii) **marriage**

Or,

i) **mercy**

ii) **peace**

44) **Either,**

i) Jesus Christ was betrayed by **Judas Iscariot**.

ii) Jesus was crucified on the cross at a place called **Golgotha**

Or,

i) The place where Muslims go for pilgrimage (Holy journey) is called **Mecca in Arabia Saudi**

ii) A Mosque is a place where Muslims always go to perform their **prayers**.

45) a) They are sources of income. **True**

b) They are sources of medicine. **True**

46) **Either,**

i) Omnipotent **True**

ii) Omnipresent. **True**

Or,

i) Reading or reciting the Holy Qur'an daily is a good thing that a Muslim should do or perform **True**.

ii) A Muslim should show kindness to the poor and help the needy: **true**.

47) **Either,**

i) **Guides people in all**

ii) **Helps Christians to live peacefully**

Or,

i) **Not eating pigs**

ii) **Not drinking alcohol**

48) **Either,**

i) The Old Testament records the preparation of Salvation: **is the first division of the Christian biblical Canon**

ii) The New Testament records the accomplishment of Salvation.

Is the second division of the Christian biblical canon

Or,

i) **False**

ii) **True.**

49) **Either,**

i) **Through praying, worshiping and praising**

ii) **Through preaching and reading the bible.**

Or,

i) **To ask for forgiveness from Allah and show obedience to him**

ii) **To ask for god's protection and communicate to him**

50) i) **showing love and care for people**

ii) **showing kindness and helping people**